

1. (12 pts) A constant force $\mathbf{F} = \langle 12, -9, 0 \rangle$ acts on a particle of mass $m = 3$. Newton's Law says that $\mathbf{F} = m\mathbf{a}$, where \mathbf{a} is the acceleration. At the time $t = 0$, the particle is located at $(0, 0, 7)$ and the initial velocity is $\langle 1, 3, -2 \rangle$.

- (a) Find the location of the particle at time $t = 1$.

$$\vec{a}(t) = \frac{1}{m} \mathbf{F} = \langle 4, -3, 0 \rangle$$

$$\vec{v}(t) = \int \vec{a}(t) dt = \langle 4t + c_1, -3t + c_2, c_3 \rangle$$

$$\vec{v}(0) = \langle 1, 3, -2 \rangle \Rightarrow \vec{v}(t) = \langle 4t + 1, -3t + 3, -2 \rangle$$

$$\vec{r}(t) = \int \vec{v}(t) dt = \langle 2t^2 + t + d_1, -\frac{3}{2}t^2 + 3t + d_2, -2t + d_3 \rangle$$

$$\vec{r}(0) = \langle 0, 0, 7 \rangle \Rightarrow \vec{r}(t) = \langle 2t^2 + t, -\frac{3}{2}t^2 + 3t, -2t + 7 \rangle$$

$$\boxed{\vec{r}(1) = \langle 3, \frac{3}{2}, 5 \rangle}$$

- (b) Find the curvature at time $t = 0$.

$$K(0) = \frac{|\vec{r}'(0) \times \vec{r}''(0)|}{|\vec{r}'(0)|^3}$$

$$\langle 1, 3, -2 \rangle \times \langle 4, -3, 0 \rangle = \begin{vmatrix} \vec{i} & \vec{j} & \vec{k} \\ 1 & 3 & -2 \\ 4 & -3 & 0 \end{vmatrix} = (0-6)\vec{i} - (0-8)\vec{j} + (-3-12)\vec{k} = \langle -6, -8, -15 \rangle$$

$$K(0) = \frac{\sqrt{(-6)^2 + (-8)^2 + (-15)^2}}{(1^2 + 3^2 + (-2)^2)^{3/2}} = \frac{\sqrt{325}}{14^{3/2}} \approx 0.3441514684$$

- (c) Find all times when the tangential component of acceleration is zero.

$$a_T = \frac{\vec{r}'(t) \cdot \vec{r}''(t)}{|\vec{r}'(t)|} \stackrel{?}{=} 0 \Leftrightarrow \vec{r}'(t) \cdot \vec{r}''(t) \stackrel{?}{=} 0$$

$$4(4t+1) - 3(-3t+3) + 0 \stackrel{?}{=} 0$$

$$16t + 4 + 9t - 9 = 0$$

$$25t = 5 \Rightarrow t = \frac{5}{25} = \boxed{\frac{1}{5}}$$

2. (12 pts)

(a) Using the linear approximation at (2, 1), estimate the value of the function

$$f(x, y) = y \cos(2 - xy) + x^2 + \ln(y)$$

at the point (2.1, 0.95).

$$f(2, 1) = 1 \cos(0) + 4 + 0 = 5$$

$$f_x = -(-y)y \sin(2 - xy) + 2x \Rightarrow f_x(2, 1) = 1^2 \sin(0) + 2(2) = 4$$

$$f_y = \cos(2 - xy) - (-x)y \sin(2 - xy) + \frac{1}{y} \Rightarrow f_y(2, 1) = \cos(0) + 2 \sin(0) + \frac{1}{1} = 2$$

$$L(x, y) = 5 + 4(x - 2) + 2(y - 1)$$

$$L(2.1, 0.95) = 5 + 4(0.1) + 2(-0.05) = 5 + 0.4 - 0.1 = \boxed{5.3}$$

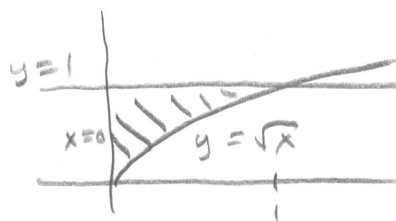
ACTUAL VALUE

$$\approx 5.308694831$$

(b) Find the volume of the solid that is below the surface $z + x^2 = 4$, above $z = 0$, and between the surfaces $x = 0$, $y = \sqrt{x}$, and $y = 1$.

INTEGRAND: $z = 4 - x^2$

$$\iint_D 4 - x^2 dA$$



$$= \int_0^1 \int_{\sqrt{x}}^1 4 - x^2 dy dx$$

or $\int_0^1 \int_0^{y^2} 4 - x^2 dx dy$

$$= \int_0^1 4x - \frac{1}{2}x^2 \Big|_0^{y^2} dy$$

$$= \int_0^1 4y^2 - \frac{1}{2}y^6 dy$$

$$= \frac{4}{3}y^3 - \frac{1}{21}y^7 \Big|_0^1$$

$$= \frac{4}{3} - \frac{1}{21} = \frac{28-1}{21} = \frac{27}{21} = \frac{9}{7}$$

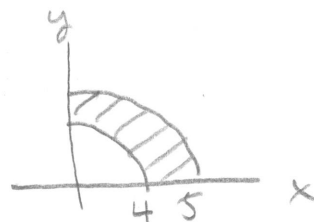
$$\boxed{\frac{27}{21} = \frac{9}{7}}$$

$$= 1.285714$$

3. (12 pts)

(a) Consider the region D bounded between $x^2 + y^2 = 16$ and $x^2 + y^2 = 25$ in the first quadrant.

Evaluate $\iint_D \frac{y^2 \cos(\sqrt{x^2 + y^2})}{(x^2 + y^2)^{3/2}} dA$



$$\int_0^{\pi/2} \int_4^5 \frac{r^2 \sin^2 \theta \cos(r)}{r^3} r dr d\theta$$

$$\int_0^{\pi/2} \sin^2 \theta d\theta \int_4^5 \cos(r) dr$$

$$\int_0^{\pi/2} \frac{1}{2} (1 - \cos(2\theta)) d\theta \int_4^5 \cos(r) dr$$

$$\left[\frac{1}{2} \theta - \frac{1}{4} \sin(2\theta) \right]_0^{\pi/2} \cdot \left[\sin(r) \right]_4^5$$

$$\left[\left(\frac{\pi}{4} - 0 \right) - (0 - 0) \right] \cdot \left[\sin(5) - \sin(4) \right] = \boxed{\frac{\pi}{4} (\sin(5) - \sin(4))}$$

$$\approx -0.1587460743$$

(b) By switching the order of integration, evaluate $\int_0^8 \int_{\sqrt[3]{y}}^2 \sqrt{x^4 + 1} dx dy$.

$$\int_0^2 \int_0^{x^3} \sqrt{x^4 + 1} dy dx$$

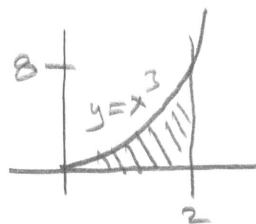
$$\int_0^2 y \sqrt{x^4 + 1} \Big|_0^{x^3} dx$$

$$\int_0^2 x^3 \sqrt{x^4 + 1} dx$$

$$\begin{aligned} u &= x^4 + 1 \\ du &= 4x^3 dx \\ dx &= \frac{1}{4x^3} du \end{aligned}$$

$$\int_1^{17} \frac{1}{4} u^{1/2} du = \frac{1}{4} \cdot \frac{2}{3} u^{3/2} \Big|_1^{17} = \boxed{\frac{1}{6} (17^{3/2} - 1)}$$

$$\approx 11.51546594$$



4. (12 pts) Find non-negative numbers x , y and z that minimize the quantity

$$A = x^2 + 3y^2 + z,$$

subject to the condition $xyz = 12$.

Give x , y , and z as decimals correct to 3 digits after the decimal.

(Use the second derivative test and your decimal answers at the end of the problem to verify your answer is a local minimum).

$$A(x,y) = x^2 + 3y^2 + \frac{12}{xy}$$

$$\textcircled{1} A_x = 2x - \frac{12}{x^2y} \stackrel{?}{=} 0 \Rightarrow 2x^3y = 12 \Rightarrow x^3y = 6 \Rightarrow y = \frac{6}{x^3}$$

$$\textcircled{2} A_y = 6y - \frac{12}{xy^2} \stackrel{?}{=} 0 \Rightarrow 6xy^3 = 12 \Rightarrow xy^3 = 2$$

$$\textcircled{1} \& \textcircled{2} \Rightarrow x \left(\frac{6}{x^3} \right)^3 = 2 \Rightarrow \frac{6^3}{x^8} = 2$$

$$\Rightarrow x^8 = 108$$

$$\begin{aligned} x &= 108^{1/8} \approx 1.795467 \\ y &= \frac{6}{108^{3/8}} \approx 1.037 \\ z &= \frac{12}{xy} = \frac{12(12)}{108^{1/8} \left(\frac{6}{108^{3/8}} \right)} = 2(108)^{1/4} \\ &\approx 6.447 \end{aligned}$$

$$A_{xx} = 2 + \frac{24}{x^3y}$$

$$A_{yy} = 6 + \frac{24}{xy^3}$$

$$A_{xy} = \frac{12}{x^2y^2}$$

at the critical value

$$A_{xx} = 6$$

$$A_{yy} = 18$$

$$A_{xy} \approx 3.464101615$$

$$D = A_{xx}A_{yy} - (A_{xy})^2 = 6 \cdot 18 - (3.464101615)^2 = 96 > 0$$

$$\text{and } A_{xx} = 6 > 0$$

LOCAL MINIMUM